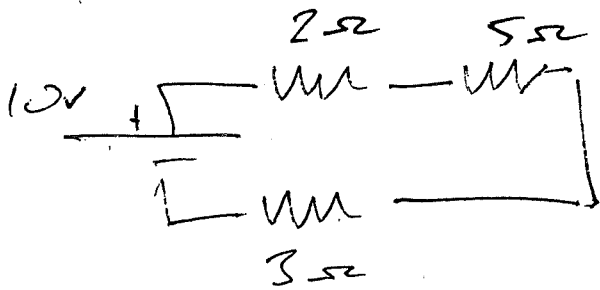
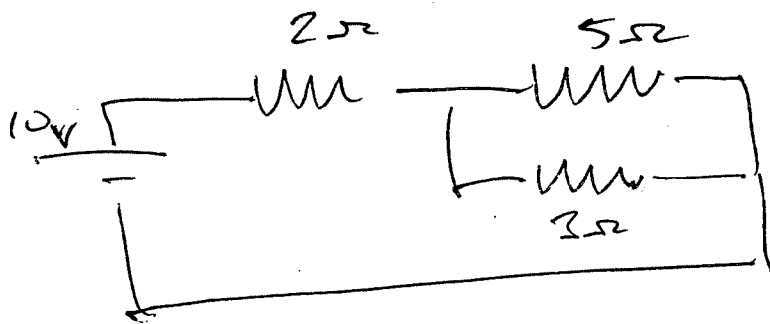


# Plus Practice Circuits

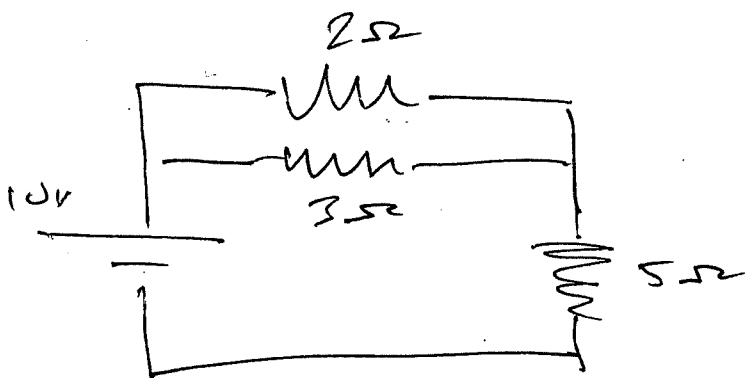
name \_\_\_\_\_ period 2, 4, 3  
circle one ↑



- Determine the current  $I$ , through the battery
- Determine the voltage across the 3Ω resistor.



- Determine the voltage across the 2Ω resistor
- Determine the current through the 3Ω resistor



Determine the voltage across the 5Ω resistor